



HOME LEARNING

YEAR 4

19/05/2020

Morning Message

Bonjour Year 4! Comment ça va?

Can you believe it's nearly the half term holidays again?

In writing, you are going to create a newspaper report about a **giant storm** heading to the UK. In Maths, you will be ordering amounts of money.

Thank you for your '**How to keep your teeth healthy**' leaflets. We have really enjoyed reading them!

Answer for Monday's question was Santo Domingo. Today's country is **British Virgin Islands**. What is the capital of **British Virgin Islands**?

Please also remember to log on to Accelerated Reader when you finish a book to complete a quiz.

Continue practising your spellings and multiplication tables. For this, you will be using Purple Mash-**Monster Multiplication**. Please make sure you read every day.

Let's have a lovely day everyone.

Ms. Foster, Ms. Greenaway & Mr. Sowa

Today's Picture



Writing

Write a newspaper report about a giant storm heading for the UK.

Write a newspaper report about a terrible storm that is about to hit the UK.

Think about:

What information you need to include. When will the storm likely hit the UK?
What should people do? How bad could the damage be?

Remember to:

- Make your headline short and snappy.
- Write an introductory sentence telling your reader what the story is about.
- Write your report in the third person and the past tense.
- Split your newspaper report up into paragraphs.
- If you use quotes to make your report more interesting, don't forget to use speech marks!
- Use a photo with a caption to give the reader more information.
- Fill your newspaper report with both facts and opinions.
- Facts give the reader all of the information they need by using the **5Ws**.

Links to help you:

- <https://www.bbc.co.uk/bitesize/topics/z2yycdm/articles/z2gk9qt>

Reading

In your home learning writing book write the date in the margin and write:

Reading- Day 2-Glossary.

Use the list of words that you made yesterday. Use a dictionary to look up each word and write what it means neatly next to the word. Then write your own sentence using that word.

Some words I would like you to start with are:

- **Intensively**
- **Privileged**

Look up in an atlas or on google maps where **Zhezkazgan** in Kazakhstan is.

Children to access **Accelerated Reader** whilst at home.

Please follow the link below to the exact same page as the children have seen in school:

<https://ukhosted3.renlearn.co.uk/1922510/Public/RPM/Login/Login.aspx?srcID=s>

Maths

Year 4

Power Maths Book 4C

19-5-20

Pages 35 - 37

Example:

20pence, 8pence and £4 is **£4.28p**

Can you write the following correctly?

- A)** 50pence, £2 and 9pence
- b)** 70pence, £6, 4pence
- c)** £10, 90pence, 2pence

Vocabulary: Notes, coins, pounds (£), pence (p), add, subtract, change, round to the nearest, order, total, notation, >, <.

Ordering amounts of money

Discover



Isla

- 1** a) Put the items in order from least to most expensive.
- b) Which items could Isla buy with the money she has?

48

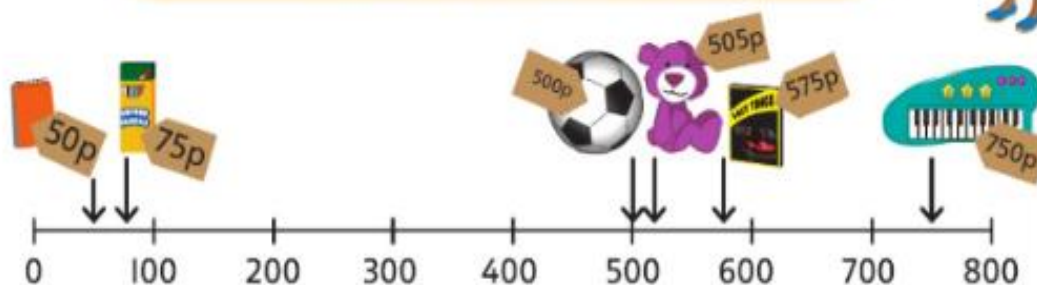
Key 1p 2p 5p 10p 20p 50p £1 £2

Share

a) Convert the amounts to pence.



To order the items, I converted them to the same notation and then put them on a number line.



The items in order from least to most expensive are: notepad, pack of pencils, football, teddy bear, computer game and musical keyboard.

b) Isla has a £5 note.



Isla could buy any items that cost 5 pounds or 500 pence or less.

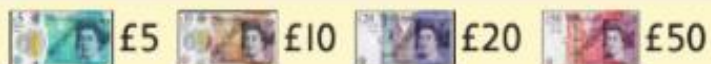
So she could buy the football, because that is exactly £5, or she could buy the pencils and notepad.



$$75p < 500p \quad \text{£}0.50 < \text{£}5$$

She could not buy the teddy bear as it costs more than 500p.

$$505p > 500p$$



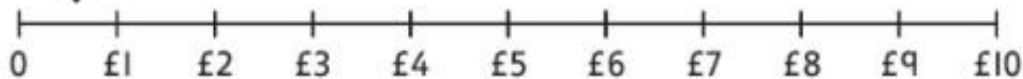
Think together

1

59 pence £5.99 £0.99 9 pounds 95 pence 595p



59 pence



- Which is the cheapest item on the shelf?
The cheapest item on the shelf is _____.
- Which is the most expensive item on the shelf?
The most expensive item on the shelf is _____.
- Order the items from the least to the most expensive.
- Now order the items from the most expensive to the least expensive.

2 Alex has these coins.



Which of the toys could Alex buy?

Alex could buy _____.

50

Key 1p 2p 5p 10p 20p 50p £1 £2

CHALLENGE

3



Kate



Amelia



Richard



Max

Kate, Amelia, Richard and Max are comparing how much money they have.

Max

I have the most money as I have a £5 note.



No, I have the most money as I have the greatest number of coins.

Richard




I will put the numbers in order and see if either of them are correct.



I think one of them might be right, but it is not for the right reason.



What mistakes have Max and Richard made?



→ Practice book 4C p35

Now complete **pages 35 – 37** in your Power Maths books.

Tuesday and Thursday: Go on the Mathletics website to complete the tasks that have been set.

<https://www.mathletics.com/uk/>

Weekly Spellings

Spelling focus for the week: We are revising the statutory spelling words for Year 4.

greatest	puzzles	optician
hottest	fractions	electrician
largest	numerator	politician
quickest	denominator	musician
fastest	multiply	mathematician

You should know what the word means and be able to use it in a sentence.

Foundation Work (for the week)

Science

This week we are looking at the inside of our teeth and what they are made from.

There is a quiz to do on purple-mash, it is set as a 2Do.

Before you do it have a look at this video and do some research on what teeth are made from.

This is what the quiz page looks like.

Information can be found on this video:

<https://youtu.be/dpZ0Nv3uZqw>

And this website: <https://www.childrensuniversity.manchester.ac.uk/learning-activities/science/teeth-and-eating/the-structure-of-the-tooth/>

You have all week to do your research and the quiz, good luck.

Keep smiling with those incisors!



Diary

Write a diary of what work and activities you did today.

Remember to include your **emotions and opinions**.