



HOME LEARNING

YEAR 4

13/05/2020

Morning Message

Good morning year 4!

Today, you are going to write an informal letter home about a luxury space-age flying hotel. In maths, we will be looking back to what we have learnt about **decimals**. Complete the questions below before you turn to your book. Remember to answer the questions on page 27 using the key words, to show how much you understand. Answer for Tuesday's question was Saint Pierre. Today's country is **Saint Vincent and Grenadines**. What is the capital of **Saint Vincent and Grenadines**?

Please also remember to log on to Accelerated Reader when you finish a book to complete a quiz.

Continue practising your spellings, multiplication tables and also reading every day.

Let's have a lovely day everyone.

Ms Foster, Ms Greenaway & Mr Sowa

Today's Picture



Writing

Write a letter home.

You are on this **luxury space-age flying hotel**.

Write a letter home to describe what you can see, hear, smell and feel. Where are you going and what have you done?

Remember the features of an **informal letter**.

- **The senders address**
- **The date**
- **An appropriate greeting**
- **An introduction**
- **Chatty informal language**
- **A conclusion**
- **A rhetorical question**
- **A complimentary close**
- **A sign off.**

When you have finished ask someone in your family to read it through and tick off which of these features you have included.

Reading

In your home learning writing book write today's date in the margin and write:

Reading -Day 3: **Teacher comprehension questions**.

Re-read this week's text and answer these questions.

You don't need to write out the questions, but you do need to write in full sentences which means include part of the question in your answer.

1. **What name do the Angela and Harry give their treehouse?**
2. **Why did it take them so long to get to the wood shop?**
3. **What adjectives does Angela use to describe the tree house?**
4. **Angela uses a metaphor to describe her anger. What does she use?**

5. What does the extract tell us about Harry? Write a character description of Harry?

Children to access **Accelerated Reader** whilst at home.

Please follow the link below to the exact same page as the children have seen in school:

<https://ukhosted3.renlearn.co.uk/1922510/Public/RPM/Login/Login.aspx?srcID=s>

Maths

Year 4

Power Maths Book 4C

13-5-20

Pages 27 – 28

Today we're seeing what we have learnt in **decimals**.

Complete the questions below (End of unit check) before you turn to your book.


Remember to answer the questions on page 27 using the keywords, to show how much you understand.

Vocabulary: tenths, hundredths, decimal point, 0.1 and 0.01 whole number, decimal place, =, >, <, comparing decimals, ordering decimals, halves, quarters

End of unit check



- 1 Which number completes the calculation?



$$0.65 + \square = 1$$

- 2 2 ones, 5 tenths and 3 hundredths is equal to:

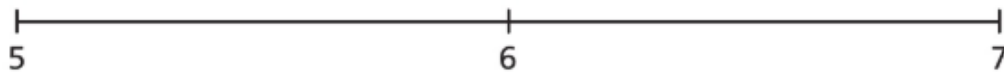
A 253 B 352 C 2.53 D 25.3

- 3 These numbers are listed in order from the smallest to the largest. What could the digit missing from the box be?

3.46 3.79 4.28 4.2□ 4.38

A 7 B 0 C 9 D 3

- 4 Which of the following numbers does not round to 6 when rounded to the nearest whole number?



- A 6.5 B 6.2 C 5.5 D 5.9

- 5 Which of the following is equal to 7,060 grams?

- A 70 kg and 60 g
B 7 kg and 600 g
C 7 kg and 60 g
D 7 kg and 6 g

- 6 How many kilograms does the bag of sugar weigh? Explain your thinking.



Now complete **pages 27 – 28** in your Power Maths books.

Tuesday and Thursday: Go on the Mathletics website to complete the tasks that have been set.

<https://www.mathletics.com/uk/>

Weekly Spellings

Spelling focus for the week: We are revising the statutory spelling words for Year 4.

eighth	admission	discussion
island	possession	mission
interest	succession	impression
February	expression	progression
certain	profession	procession

You should know what the word means and be able to use it in a sentence.

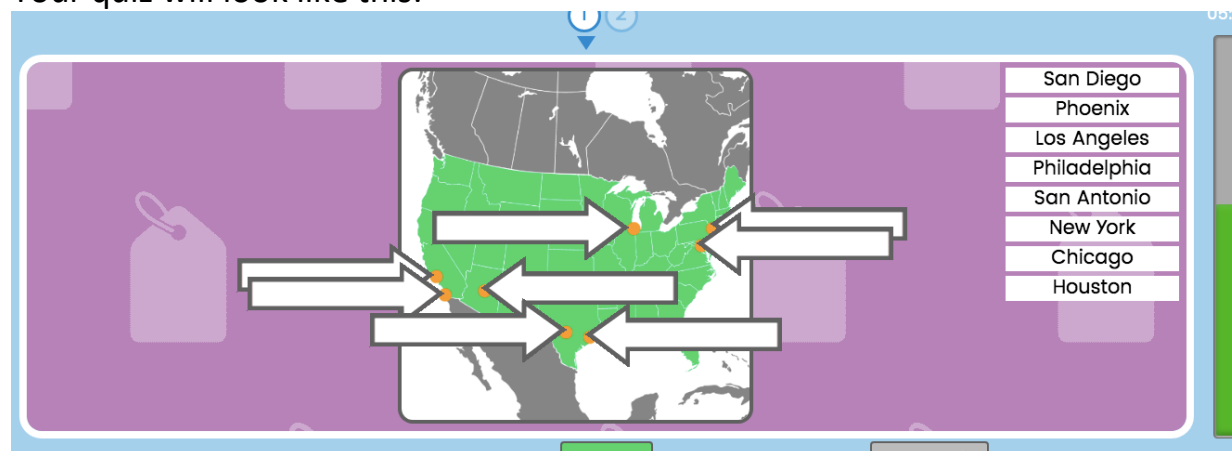
Foundation Stage Work (for the week)

North America: USA

This week our foundation subject is **geography**. We are continuing to look at countries in North America. This week we are focusing on the **USA**. On purple mash there are two quizzes on the different states and some major cities in the USA.

You will need to use books/Google or ask an adult to identify the different states and cities.

Your quiz will look like this:



If you fancy a **challenge** here is an **extension sheet** where you have to label **all** of the states of the USA!

The United States of America

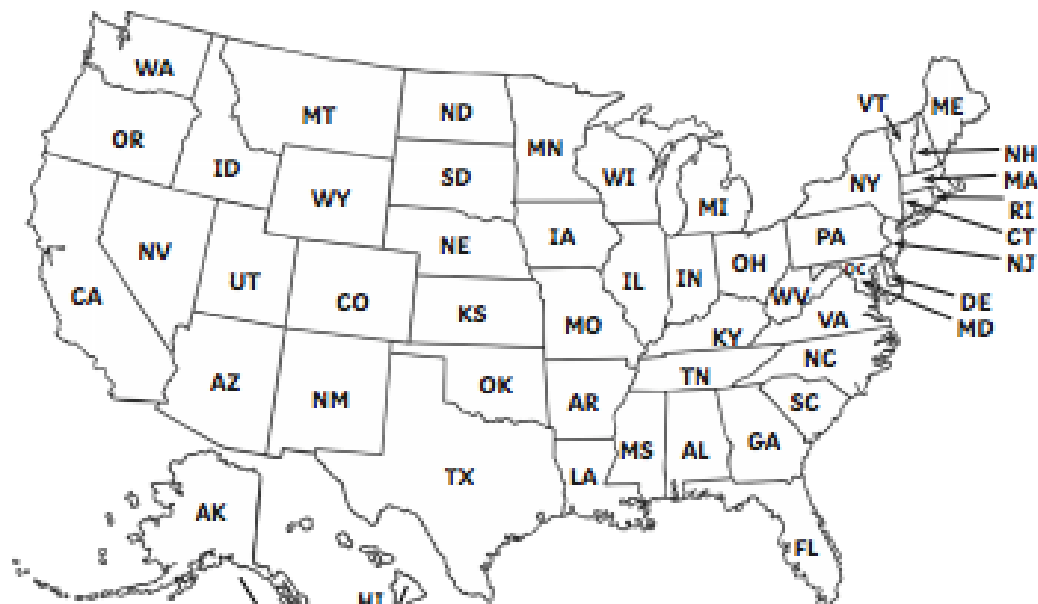
Amazing Fact

It is illegal to drive with a blindfold on in the state of Alabama in the USA.

Challenge


The USA is made up of 50 individual states.

Use the internet, non-fiction books or your own knowledge to name as many of these as you can!



Did You Know...?

Alaska and Hawaii are actually here and here!



You could also try to find out:

- about other unusual driving laws;
- where Alabama is;
- what the most common cause of car accidents is;
- how safe zebra crossings are.

Diary

Write a diary of what work and activities you did today.
Remember to include your **emotions and opinions**.