



## HOME LEARNING

YEAR 2

2/07/20

### Morning Message

Good morning Year 2,

Here is the zoom meeting ID, which will be the same for all lessons.

**604 584 9817**

Your parents will receive the password via email.

We hope you all had a good night's sleep and are ready for today's exciting home learning. We've again set some exciting Mathletics tasks for you to complete today after you've finished your Power Maths activity. Continue practising your spellings for a test tomorrow and also continue reading aloud to an adult. The answer to yesterday's riddle:

**Which month has 28 days?**

Answer: **every month of course!**

Well done if you figured out the answer to the riddle.

We hope you have another enjoyable day everyone!

Mr Duker, Ms Bastick and Mr Kai

### Picture of the Week



## Writing

### LO: To write a funny scene

Today you will be writing the scene where your character uses the dragon. Try to make the scene funny!

If I were writing the scene for my story, where Molly uses the dragon to scare the bully I might describe:

- the dragon growing from a tiny size to an enormous beast – perhaps a teacher in the playground might start crying!?! Perhaps Gerald will accidentally do a little burp? *"I always have problems with gas when getting bigger"*
- the dragon picking up the bully by her feet and flying off into the sky. The bully screeching. Children in the playground with their mouths open in awe
- the dragon telling the bully she is a very naughty girl and that she should be nice to Molly
- the bully, after being dropped off, apologising to Molly and Molly introducing Gerald to everyone at school. Perhaps the teacher faints!?

**Tips for success: Follow your plan, use descriptive language, add lots of detail, make your writing funny, use speech.**

# The Football Association Challenge

## The Cup Final

### Cup Final Facts

- The match is widely known as just the Cup Final.
- It is the last match in the Football Association (FA) Challenge Cup.
- It has about 86 000 spectators and millions of TV viewers.
- The trophy (winner's cup) is only on loan to the winning side.
- It is the oldest cup competition in the world, first played in the 1871 - 72 season.

### Who Can Enter?

The Challenge Cup competition is open to any club in the top ten levels of the English Football League. Once clubs have registered to play, the tournament is organised into 12 randomly drawn rounds, followed by the semi-finals and finals. The higher ranked teams join the competition in later rounds when some of the lower ranked teams have been knocked out.

### What Do the Winners Receive?

The winners of the final match receive the Football Association Cup, the FA Cup. It comes in three parts; the base, the cup and a lid. Over the years, there have been two designs of trophy and five cups have been made. The first cup, known as the 'little tin idol', was stolen in 1895 and never returned. An exact replica was made and used until 1910. From 1911, a new design was made. In 1992, another copy was made as the cup was wearing out from being handled, and another replacement was made in 2014. The cup is presented at the end of the match, giving the engraver just five minutes to engrave the winning team on the silver band on the base. The cup has ribbons from both teams decorating it during the final. The loser's ribbon is removed before the presentation. Each club in the final match is given 30 winners or runners-up medals. These are given to players, staff and officials.



## The Football Association Challenge

### Fantastic Final Facts

**Most wins:**

Arsenal and Manchester United (12)

**Most appearances in a final:**

Arsenal (20)

**Most defeats:**

Everton (8)

**Biggest winning margin:**

6 goals (Bury v Derby County, 6-0)

**Most goals in a final:**

7 goals (Blackburn Rovers v Sheffield Wednesday, 6-1 and Blackpool v Bolton Wanderers, 4-3.)

**Most appearances without losing:**

Wanderers (5)

**Most appearances without winning:**

Leicester City (4)

**Youngest FA Cup finalist:**

Curtis Weston of Millwall (17 years 119 days.)

**Oldest FA Cup finalist:**

Billy Hampson of Newcastle United (41 years and 257 days.)

**Did You Know?**

- The first winners of the cup in 1872 were Wanderers, who also won it the following year.
- The Challenge Cup was suspended in 1915 - 1919 because of the First World War.
- In 1923, the final was played at the newly opened Wembley Stadium.
- The Challenge Cup was suspended again between 1939 - 1945 because of the Second World War.



# Questions

1. What competition ends in the Cup Final?

---

2. What year was the Cup Final first played?

---

3. Give a reason why the top ranked teams join the competition in round three.

---

4. Find and copy a word that means that the teams were recorded to play in the competition.

---

5. Put the following information in the order it is found in the text. The first one has been done for you.

An exact replica was made.

The losers ribbon is removed before the presentation.

The 'little tin idol', was stolen.

The cup was wearing out from being handled.

6. Mark your choice from the answers below.

a. Which team has had the most appearances in a final?

Stafford

Wigan

Arsenal

Wanderers

b. How old was the youngest FA Cup finalist?

41 years 257 days

17 years 119 days

17 years 257 days

41 years 119 days

c. Which Club has had the most FA Cup wins?

Everton

Arsenal

Manchester United and Arsenal

Manchester United

7. Why was the FA Cup suspended during the First and Second World Wars?

---

8. In what years did Wanderers win the FA Cup?

---

9. How is the information text organised? List two ways.

---

10. Do you think it is better to watch a football match in the stadium, or at home? Explain your opinion.

---

---

---

---

Continue reading your own book afterwards. Remember to read out to an adult.

**Phonics focus this week:** adding 'ing'

Watch this clip to support learning

<https://www.youtube.com/watch?v=6JUoB9ax16M>

## Time (Lesson 7)

### Finding the end time!

In this lesson, children will use their understanding of durations of time and counting around a clock to find an end time, when given a start time and a duration.

**Key vocabulary:** hands, face, hour, minute, analogue, o'clock, past, to, half past, quarter past, quarter to, quarter of an hour, almost, same, units, last, convert, how long, less, passed, shorter, longer, fastest, slowest, five, ten, fifteen, twenty, twenty-five, thirty, thirty-five, forty, forty-five, fifty, fifty-five, sixty, 5, 10, 15, 20, 25, 30, 35, 40, 45, 50, 55, 60, time, start time, end time, duration, time taken, finish, forwards, backwards, twice 24 hours, day, daytime, night time, around the clock, am, pm, midday, midnight, morning, afternoon.

Unit 13: Time, Lesson 7

## Finding the end time

### Discover



- 1** a) What time does the dough need to go in the oven?
- b) The bread needs to bake for 30 minutes. What time should it be taken out of the oven?

## Share

a)

Can I find the end time by counting forwards?



time now



time taken



end time



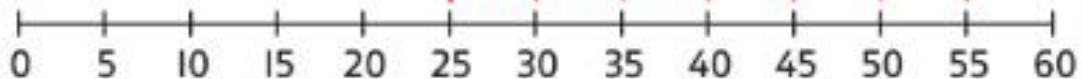
The dough needs to go in the oven at twenty-five minutes past 1.

b)

I used a number line to find the baking time.



+ 30 minutes



The bread should be taken out of the oven at fifty-five minutes past 1. We call this time five minutes to 2.



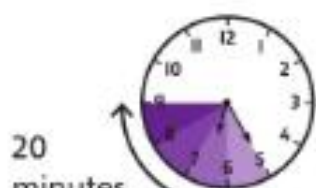
## Think together

- 1 It is twenty-five minutes past 6.

A pizza takes 20 minutes to cook. What time will it be ready?



time now

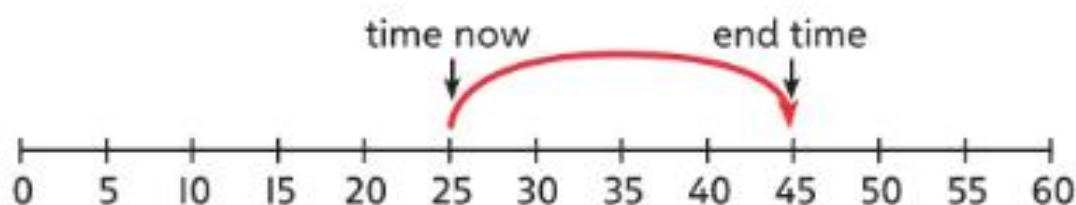


20  
minutes

time taken




end time



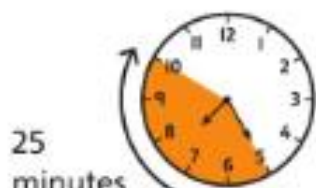
The pizza will be ready at \_\_\_\_\_.

- 2 It is twenty-five minutes past 7.

These  take 25 minutes to cook. What time will they be ready?



time now



25  
minutes

time taken



end time

The  will be ready at \_\_\_\_\_.

CHALLENGE

3 The Kids Cookery Show lasts for 15 minutes.

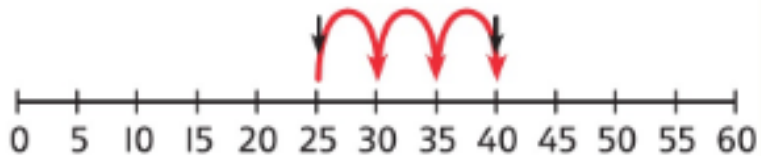
It starts at twenty-five minutes to 8.

What time does it finish?

Lucy



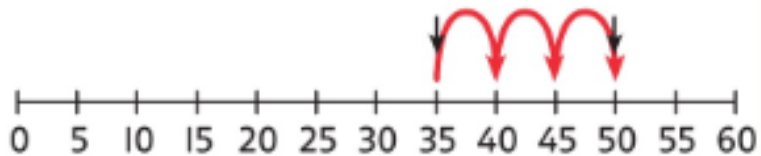
I started on 25 and counted three jumps of 5 to show 15 minutes. I ended on 40. The answer is 40 minutes past 8.



Filip



I started on 35 because twenty-five to 8 is the same as thirty-five past 7. I counted 15 minutes and ended on 50. The answer is fifty minutes past 7 which we say as ten to 8.



Who is right?

I can use my knowledge of 'past' and 'to' to help me.



**Now complete pages 64-66 in your power maths 2C books.**

Tuesday and Thursday: Go on the Mathletics website to complete the tasks that have been set.

<https://www.mathletics.com/uk/>

## Weekly Spellings

Revise spelling words which end in – **ing** over the week to be tested on them on Friday.

(See word list below)

Make sure you put the words in sentences so you understand the meaning.

1. playing
2. jogging
3. running
4. living
5. hunting
6. lifting
7. sleeping
8. sailing
9. naming
10. driving
11. hitting
12. believing

## Foundation Subjects Work (for the week)

### Fantastic fruit salad

Your task this week on Purple Mash is make a fruit salad using either British or tropical fruit. You need to write a set of instructions for how to make your fruit salad. Draw or upload a picture of the finished fruit salad. Once it's finished and you have tasted it evaluate by answering the following questions. What did you like about it? What didn't you like about it? What would you change? How would you improve it?



## Diary

Write a diary of what work and activities you did today. Remember to include your emotions and opinions.

